





1. Draw a pair of parallel lines that are horizontal.
2. Write the time that is ten minutes before eight in the morning.
3. Four decades is how many years?
4. List the factors of 21.
5. The gas tank in Mario's car holds 16 gallons of gas. Four quarts equal one gallon. How many quarts of gas does the gas tank hold?
6. Round 83 to the nearest ten.
7. Round 582 to the nearest hundred.
8. Compare. $20 - (10 - 5)$ $(20 - 10) - 5$
9. What fraction of the rectangle is shaded?
10. What fraction of the rectangle is not shaded?
11. Which of these angles appears to be a right angle?
 A.  B.  C. 
12. The arrow is pointing to what number on the number line?

13. $\$6.57 + \$12 + \$7.79 =$ 14. $\$10 - \$6.45 =$
15. $8 \times 12 \times 20 =$ 16. $125 \times 400 =$
17. $8 \overline{)4864}$ 18. $368 \div 5 =$ 19. $\frac{3000}{6} =$
20. What are the next three numbers in this sequence?
 ..., 750, 800, 850, 900, _____, _____, _____



Answers	
1	
2	
3	
4	
5	
6	
7	
8	
9	
10	
11	
12	
13	
14	
15	
16	
17	
18	
19	
20	